


Counting

1. Count. Write the number in the box.




a. 3



b. 2




c. 5




d. 4




e. 6



f. 5

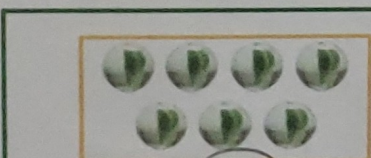


g. 9



h. 8

2. Count. Write the number. Then circle the number that is MORE.




a. 7



6



b. 3




4




c. 12



10



d. 6



7